

TABLE OF CONTENTS

INTRODUCTORY INFORMATION

Teaching Suggestions iii
How to Use a Chart iv

ACTIVITIES

Logic 1
Math 15
Reading 29


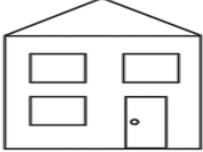


SOLUTIONS 43





SAMPLE ACTIVITIES 54

Free resource from www.criticalthinking.com. Commercial redistribution prohibited

ACTIVITY 9

DIRECTIONS: Fill in the chart using Y for yes or N for no as you solve the puzzle.

A firefighter, a doctor, a boy, and a girl all live in different houses. Find which house belongs to each person.

1. The girl's house has more than two windows and is not the widest.
2. The firefighter's house has fewer than three windows.
3. The doctor's house has one more window than the firefighter's and two more windows than the boy's.